

教材見本

ポイント学習シリーズ

# 空間能力の育成

ウッディブロックを使い、上下・前後・左右に分解して数をとらえさせ  
構成把握能力を育てます。



ピグマリオン学育研究所

# 思考力育成問題集

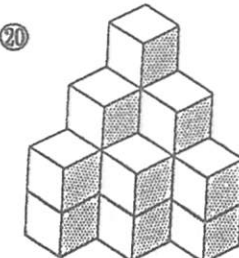
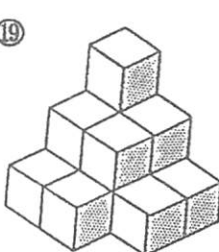
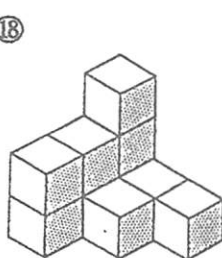
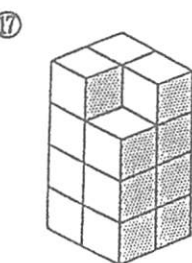
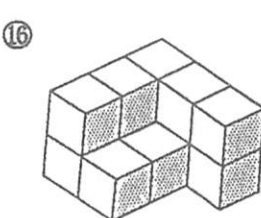
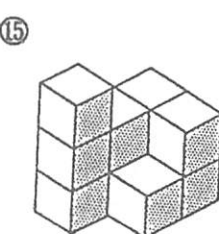
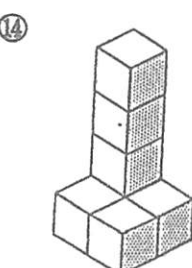
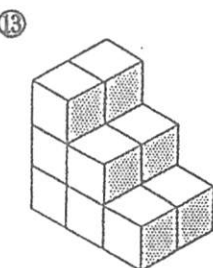
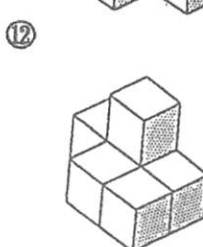
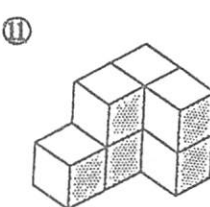
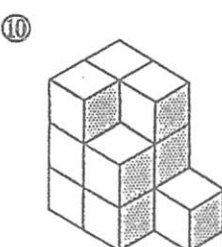
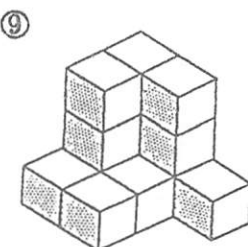

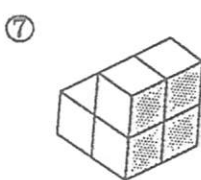
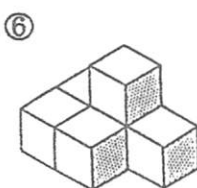
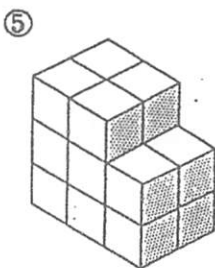
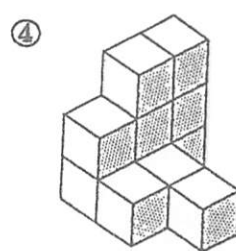
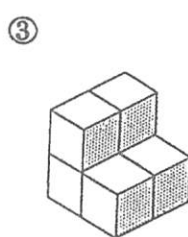
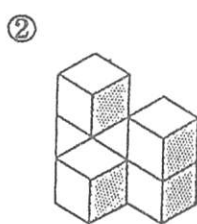
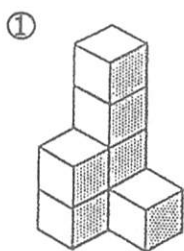
## 積み木の数

⑤



(社)思考力教育学会

積み木の数はいくつ？

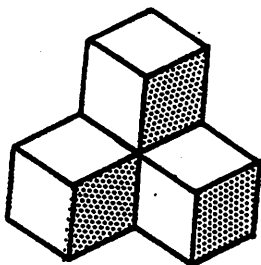


能力育成問題集  
5 方 向 知 覚  
③



(社)思考力教育学会

### 5 方向知覚



①上から見た形

②後ろから見た形

③前から見た形

④左から見た形

⑤右から見た形

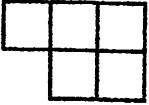
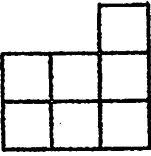

思考力育成問題集  
積木 / 推理  
②



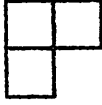
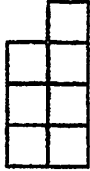
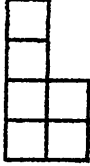
(社)思考力教育学会

①うえ、②まえ、③ひだりから見たら 下の図のように見える積み木があります。それはいくつ積まれていますか。最少の数で答えましょう。


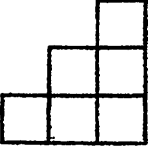
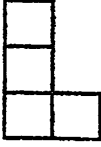
(1)

①うえ 	②まえ 
③ひだり 	<こたえ>

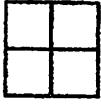
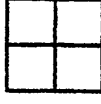
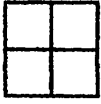
(2)

①うえ 	②まえ 
③ひだり 	<こたえ>

(3)

①うえ 	②まえ 
③ひだり 	<こたえ>

(4)

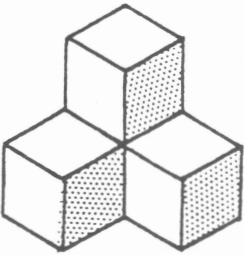
①うえ 	②まえ 
③ひだり 	<こたえ>

# ウッディブロックの使い方

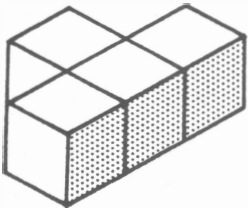
## 平面図・正面図・側面図⑥

①まうえからみた形    ②前から見た形    ③横から見た形

(1)

	①
②	③

(2)

	①
②	③